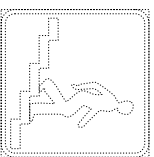
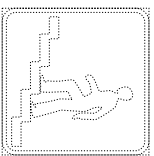
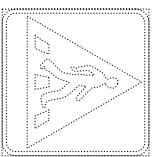


ÕIGED VASTUSED 3. Liiklusmärgid



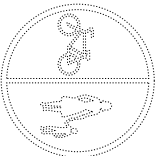
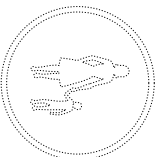
Värvi liiklusmärgid ja kirjuta nende nimed.



Ülekaigurada

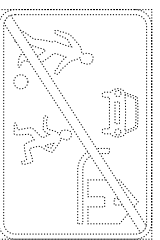
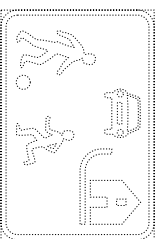
Käigu sild

Käigutunnel




Jalgtee

Jalgratta ja jalgtee



Õueala

Õueala läpp

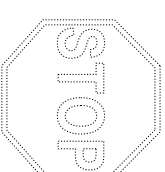
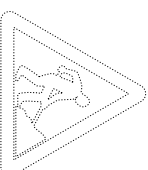


Jalgrattaga sõidu keeld

Käigu keeld



Leia loikelehelte liiklusmärgid ja kleebi kasti sisse.





Hoiatusmärgid

Eesõigusmärgid

Teetööd

Peatu ja anna teed

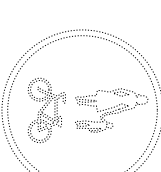
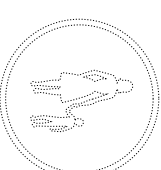
Keelu- ja mõjualamärgid



Käigu keeld

Jalgrattaga sõidu keeld

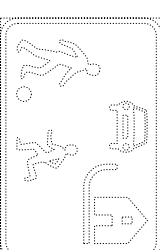
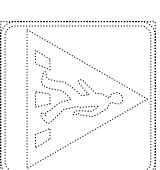
Kohustusmärgid



Jalgtee

Jalgratta- ja jalgtee

Osu tussmärgid



Ülekaigurada

Õueala